

Azaan Gems International School

Sub : English SA - I Revision Work Sheet

Grade 6

Question paper pattern of 80 marks

1. Section A Reading Comprehension (25 marks)
2. Section B Vocabulary & Grammar (20 marks)
3. Section C Conventions of Writing (5 marks)
4. Section D Creative Writing (20 marks)
5. Oral skills based on the classroom performance and Oral discourses (10 marks)

Section -A

I. Far away on a lonely island, there lived a wise old man and his daughter. The man was Shankar, a magician. His daughter was Rupali, a lovely, young girl of sixteen. They lived in a Cave, one part of which was used for Shankar's study. It was there he kept his books and studied magic most of the day. He knew so much of the art of magic that he was able to command the spirits of the island to obey him. These spirits obeyed him gladly because they were grateful to him for having rescued them from the power of the wicked ungreased, who had treated them cruelly.

Answer the following questions.

1. What was Shankar's profession?
2. What was one part of cave used for?
3. What was the name of the old man's daughter?
4. What did he command?
5. Who lived on the lonely island?

Section -B

A) Read the following passage and write as directed.

I. Once upon a time, in a very thick (1) forest there lived many animals, birds, snakes and insects. They all lived together happily. They roamed about the jungle (2), and played together on (3) the open fields without any fear. The peacock (4) were very proud of their dances but admired (5) the melodious songs of the cuckoos.

1. Write the antonym (opposite) of the underlined word.
2. Write the synonym (meaning) of the underlined word.
3. Replace the underlined word with the correct one.

4. Write the plural form of the underlined word.

5. Write the right form of the underlined word.

II. One day a jackal entered the forest. He was dirty (6), dangerous, and very cunning too. He told the elephants, "you are the bigger (7) animals in the forest. Why do you want to play with the squirrels and the rabbits"? He poisoned (8) the minds of the peacocks saying (9), "you are the loveliest bird in the forest. Why do you want to praise (10) the mynahs?"

6. Write the antonym of the underlined word.

7. Replaced the underlined word with right word.

8. Write the right form of the underlined word.

9. Write another verb form of the underlined word.

10. Write the synonym of the underlined word.

B) Complete the passage. Choose the right word from the choices below.

1) Raja Rao is now _____ (1) the railway station. He is _____ (2) for his uncle. _____ (3) uncle is coming by the Krishna express from Tirupati. The train has _____ (4). Now they are in an auto _____ (5) they reached home, Rohit said, "Welcome to our house Grandpa!"

- 1) a) at b) in c) by d) with
2) a) come b) coming c) came d) comes
3) a) her b) his c) their d) our
4) a) arrive b) arrives c) arrived d) arriving
5) a) where b) when c) which d) why

2) Once upon a time _____ (6) was a small hill. A path _____ (7) up _____ the hill. It went _____ (8) thick and lovely woods of pine _____ (9) fir trees. People _____ (10) walked on it to a holy place.

6. A) their B) there C) then D) where
7. A) go B) went C) gone D) going
8. A) though B) threw C) through D) into
9. A) or B) and C) so D) but
10. A) always B) often C) never D) seldom

C). Read the passage given below. Five sentences in the passage are numbered at the beginning. Each of these sentences has an error. Correct and rewrite them in your answer booklet.

(1) The jackal who had been waiting for this opportunity, dragged the sadhu and ran inside the jungle (2) He took the sadhu to a lone place, tore him into pieces and ate him up. (3)The animals were very sad, and angry and disappointed with what had happened to sadhu. (4) They were afraid that the hungry jackal will appear again the next day. (5)Then they listened a strange noise

Section –C

Rewrite the following sentences using necessary punctuation marks like [. , ! ? ""] and Capital letters.

- I) lets go said seema or it will be time for lunch before we know it
- II) one day a jackal entered the forest he was dirty dangerous and very cunning too
- III) that surgery her mum whispered was a real miracle I wonder how much it would have cost

Section-D

- 1) Write a possible conversation between the elephant and deer before the jackal entered the forest.
- 2) You visited a museum last week. Write a diary entry about what you saw in it.
- 3) Your friend is fond of reading good books. Write a letter to him\her inviting to visit to book fair which is going to be held in your city in December. You are living at H.no:15, MJ colony, New Delhi.
- 4) Do you have any memorable day in your life? Narrate about it in a paragraph.
- 5) A fancy dress competition will be held on the occasion of "cultural day celebrations."
Write a notice informing the students to participate in it. Imagine you are the cultural secretary.(you may include date- time -venue etc.)

Azaan Gems international School

Grade 6

Revision Worksheet

Urdu

۱۔ مندرجہ ذیل الفاظ کے معنی لکھیے۔

.....
.....
.....
.....

۲۔ مندرجہ ذیل الفاظ کے متضاد لکھیے۔

.....
.....
.....
.....

۳۔ مندرجہ ذیل الفاظ کے مونث لکھیے۔

.....
.....
.....
.....

۴۔ مندرجہ ذیل واحد الفاظ سے جمع بنائیے۔

.....
.....
.....
.....

۵۔ مندرجہ ذیل الفاظ سے جملے بنائیے۔

..... = ۱۔ اہل وطن

۲۔ حسن خوبی =

۳۔ رفتار =

۴۔ دیکھ بھال =

۵۔ ہنستے کھیلتے =

۶۔ ایکتا =

۷۔ پہل کرنا =

۶۔ مندرجہ ذیل جملوں سے اسم اور ضمیر کی شناخت کیجئے۔

۱۔ میں حیدرآباد شہر میں رہتا ہوں۔ ۲۔ یہ میری کتاب ہے۔ ۳۔ وہ پھول بہت خوبصورت ہے۔

۴۔ وہاں لڑکے کھیل رہے ہیں۔ ۵۔ راستے سے گاڑیاں جا رہی ہیں۔

۷۔ مندرجہ ذیل الفاظ کے حروف الگ کر کے لکھیے۔

۱۔ پریشان =

۲۔ معافی =

۳۔ زندگی =

۴۔ برسات =

۵۔ یقین =

۶۔ عادتیں =

۷۔ ماحول =

۸۔ مشکل =

SUMMATIVE ASSESSMENT-I-OCTOBER-2018

MATHEMATICS

CLASS VI

REVISION WORKSHEET

SECTION –I (2 MARKS QUESTIONS)

1. Simplify: $(-1) + (-5) + (-14) + 3$.
2. Find the product of 13 and 74. And write the answer in number name.
3. Write 78459648 in words in Indian numerical system.
4. Is 8049 is divisible by 6?
5. Write all the factor of 48.
6. '1' is neither prime nor composite. Give reasons?
7. Fill the blanks:
(I) $(-1) + \underline{\hspace{2cm}} = 0$ (II) $\underline{\hspace{2cm}} - 16 = -22$
8. Write the number in expanded form.
(I) 58964 (ii) 40032
9. Find the value of $36 \times 12 + 18 \times 368$.
10. Write the divisibility rule for 3, with an example.
11. Define the term Co-prime.
12. Define Angles with an example.

SECTION –II (4 MARKS QUESTIONS).

13. A bus driver filled his bus diesel tank with 32 liters of diesels on Monday. On Tuesday, he filled the tank with 46 liters of diesel. If the diesel cost is Rs.73 per liter, how much he spend in all on diesel?
14. If 30ml of milk is required for making one cup of tea. Shusma want to make such 12 cup of tea. How much milks she need?
15. Find the H.C.F of 12, 30, and 36 by both Division and Prime factorisation method.

16. A bicycle industry make 321 bicycle in a day .Find the total number of bicycles manufacture in the month of October?
17. Write all the integers between -7 and +2.Also represented them on the number line.
18. Find L.C.M of 48, 56 and 72 by prime Factorization method.
19. Check whether 10824 is divisible by 11?
20. Define the terms (I) parallel line (II) perpendicular line (iii) intersecting line.
21. Find the value $(-7)-(-9)$ using number line.
- 22.The temperature is recorded in Shimla is -4°C and in Kufri is -6°C on the same day .Which places is colder on that day ?How?

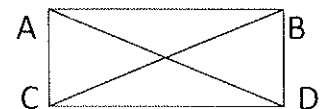
SECTION –III (8 MARKS QUESTIONS).

23. Three drums contain 45 liters, 60litres and 105 liters of water respectively. Find the maximum capacity of container which can measure the water of all three drums when used an exact number of times.
24. Sushma purchased 4Kg of potatoes, 3Kg of Tomatoes and 7Kg of mangoes. The cost of potatoes per Kg is Rs.25, cost of Tomatoes per Kg is Rs.20 and the cost of Mangoes per Kg is Rs.35.find the total cost.
25. The product of two numbers is 3276.If their HCF is 6, find their L.C.M.

26. PQRS is square.PR and QS are diagonals. Form the figure,

Write pairs of parallel lines, perpendicular line,

And intersecting line in symbolic form is possible.



27. Construct and acute angle, obtuse angle, right angle, and straight angle using protector.
28. Population of Sundar nagar was 2,35,471 in the year 1991. In the year 2001 it was found to be increased by 72,958. What was the population of the city in 2001?
29. A student multiplied 7236 by 65 instead of multiplying by 56. By how much was his answer greater than the correct answer? (Hint: Do you need to do both the multiplications?)

SUMMATIVE ASSESSMENT-1

Revision worksheet

Grade-6

Sub: SCIENCE

Chapter 1- Our food

1. Draw a diagram of any plant that you observed and label the parts.
2. What food items you prepare at home using rice?
3. How will you prevent wastage of food at functions' and parties?
4. Write a note on different methods of preparing food taking different examples?
5. What are condiments? Give examples.

Chapter 2- Playing with magnets

1. Draw the material which you use to separate iron fillings from sand.
2. What are magnetic and non-magnetic substances? Give examples.
3. What is magnetic induction?
4. List few uses of compass.

Chapter 3- Rain: Where does it come from

1. What are the different states of matter?
2. What is evaporation and condensation?
3. Write slogans about conservation of water?
4. What are the causes of droughts?

Chapter 4- What do animals eat?

1. Draw beaks of Eagle, Sparrow, Woodpecker and Hen.
2. What is rumination?
3. How does lizards and frog get their food?
4. Make your own food chain.

Chapter 5- Materials and things

1. Name few objects made using plastic.
2. Write few properties of materials?
3. List few objects that float and sink, soluble and insoluble in water.
4. What materials are used to make bicycle, mirror and door?

Chapter 6- Habitat

1. What is a habitat?
2. Draw a pond and label all the regions.
3. Fish can live in water and not on land- justify with reasons.
4. Compare water plants and land plants.

Chapter 7- Separation of substances

1. What is separation?
2. Which method of separation is used to separate stones from rice?
3. What is chromatography? Write an experiment to prove this process in separation of colours?
4. What is sublimation?

Fill in the blanks:

1. Cooking oil is a _____ product.
2. Fish is preserved by _____.
3. _____ poles attract each other.
4. _____ property of magnets help to find directions.
5. Clouds are formed from tiny droplets of _____.
6. As we move up the surface of earth _____ becomes cooler.
7. _____ are natural scavengers.
8. Humming bird use its _____ to take food.
9. _____ is a nocturnal animal.
10. Objects around us are made up of variety of _____.
11. _____ lives on the trunk of plant.
12. _____ and _____ are two types of habitat.
13. Combination of more than one substance forms a _____.
14. _____ is a sieve made up of paper which has very fine holes.
15. _____ is used to for separation of dissolved substances from a liquid.

AZAAN GEMS INTERNATIONAL SCHOOL

SOCIAL STUDIES REVISION WORKSHEET

GRADE - 6

SECTION – 1

- Explain the need of symbols in preparing maps?
- What are the important features of a map?
- Why do people who grow crops have to stay in the same places for a long time?
- How do you think the early people stored grains?
- How do you think will the dams across the rivers affect the delta soils?
- What is globe? What does it show?
- Define the following terms a) Scale b) Microliths c) Nomads

SECTION – 2

- What are the features of the following soils?
a) Alluvial b) black c) sandy
- What kind of changes are taking place in Penamakuru village?
- Describes the relief features of Telangana.
- Why is the actual distance on the ground reduced on the map?
- What are the latitudes and longitudes? Explain them with the help of diagram.
- Prepare a list of domesticated animals and agricultural products of the earliest people and write a few lines about it.

SECTION – 3

- Locate any 10 capital cities in India Map.

PART – B (10 MARKS)

- Refer the lessons from the content book.

Telugu Revision Worksheet - II Grade - 6

1. Write Vernamala ે to ે.

11. Write Gunimthaku of given letters.

ఁ: -

ం: -

ః: -

ఄ: -

అ: -


ఆ: -

Telugu Revision Worksheet - I Grade - 6

1. కొద్ది చిత్రాలకు తగిన పదానికి 'o' చుట్టండి.


See the picture and encircle the correct word.

a)



తలె , తలత , తలక

b)




తలె , తలక , తలక

c)




తలక , తలె , తలక

d)



కలెలె , కలెలె , కలెలె

e)



పలక , పలవ , పలక