

SUMMATIVE ASSESSMENT –I

GRADE –3

REVISION WORK SHEET

SUBJECT: ENGLISH

BLOCK – 1

I. Read the sentences-add an exclamation mark (!) or a question mark (?) at the end.

A. Is this the animal you are looking for

Ans: _____

B. Have you found chippy

Ans: _____

C. Finally, I found chippy

Ans: _____

D. Let's find chippy

Ans: _____

II. Write the meaning for the given words.

1) Bushy=_____

2) Stripes=_____

3) Beady=_____

BLOCK: 2

I. Fill in the blanks with a correct word.

1. Squirrel makes a _____ sound to warn their friends.

2. Squirrel _____ food for winter month.

3. The Giant Squirrel has very long _____ tail.

II. Make a new sentence using the word.

A) Bitter

BLOCK -3

I. Underline the correct form of verbs

Zippy listen /listens to the birds taking.

The sky look/looks colorful.

Zippy know/knows she is beautiful.

The butterfly kite talk/talks to her.

BLOCK-4

I. Choose the correct doing words & fill in the blanks.

- 1) India _____ our country (is/are)
- 2) China _____ our neighbor (is/are)
- 3) China _____ above India on the map (lies/lie)
- 4) Many people _____ China to see the Great China Wall (visit/visits)

BLOCK -5

I. Match the word to their opposites.

- | | |
|-----------|--------|
| a) Empty | Dry |
| b) Wet | Cold |
| c) Sweet | Full |
| d) Hot | Wide |
| e) Narrow | Bitter |

BLOCK-6

I. Read the poem .Answer the questions.

It's the rainy season yet again.

I scream and I jump like a spring in the

I splash the cold water with my small hand.

1. Write 2 things that the girls do in the poem in complete sentences.

Ans: _____

2. Write 4 more lines to add the poem use the word given in the box.

Sun-fun	Sand – hand
---------	-------------

BLOCK: 7

I. Join the Following sentences using 'AND'

A. The Cotton is made into bales. The bales are sold to a cloth factory

Ans _____

B. The yarn is taken into a loom. The loom .Turns it into

Ans _____

II. Meaning.

- 1) Fibers_____
- 2) Curious_____
- 3) Wither_____

BLOCK: 8

I. Arrange the letter to make a meaningful word

1. S , i , t , r , h
2. a , r , f , l , a , d
3. p , t , e , t , y , r
4. s , r , n , o , g , t

II Solve the riddle: All answer end with __ss or __ll

- A. I am a name of size, I am the Opposite of tall.
Find me if you are wise, I am _____
- B. In the school I ring, I sound like fell.
I go ting-tong, I am a _____
- C. You use me to drink, I sound like pass.
You can hold me in your hands,
I am a _____

SUMMATIVE ASSESSMENT – I

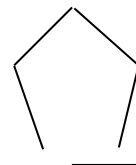
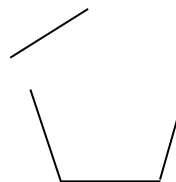

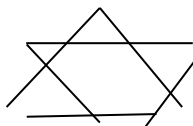
GRADE –3

REVISION WORK SHEET

SUBJECT: MATH

BLOCK – 1

1. Shade the closed shapes.



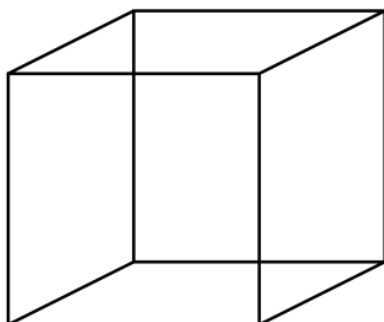
2. Draw a Quadrilateral.

3. Write top, side and front views of the figure



BLOCK-2

4. Draw the net of the given box .



5. Draw the diagonal of the given shape.

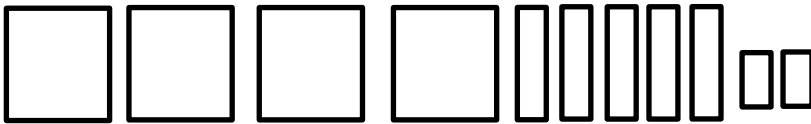


6. Choose the correct answer:

- A. A rectangle has _____ (2 / 4) corners
- B. In a rectangle _____ sides are equal (opposite / all)
- C. _____ has 4 side and 4 corners

BLOCK-3

7. Look at the place value table block and complete the table

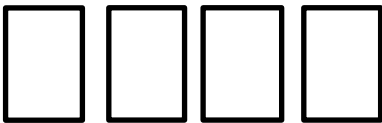


Number _____

Number name _____

Expanded form _____

8. Draw more blocks to make 800



9. $436 + \underline{\hspace{2cm}} = 500$

10. Count and fill in the blank

A. 591 _____ 594 _____ 596 _____ 599 _____

B. 956, 957 _____ 961 _____ 965

11. Write number name

A. 600 = _____

B. 985 = _____

12. Write number from 830 to 850

13. Write the Expanded form of given numbers

A. 370 = _____

B. 726 = _____

C. 510 = _____

D. 999 = _____

BLOCK-4

14. Complete the table

Numbers	Place value of underlined digit	Expanded form
<u>6</u> 280		
<u>5</u> 123		

15. Aditi has Rs.725. She wants to buy an Almirah of Rs.1000. How much money does she need more?

BLOCK-5

16. Write the number which comes before and after the given number.

Before number	Number	After number
	2100	
	2080	
	5653	

17. Arrange the number in descending order.

3060 , 2127 , 2500 , 1560

BLOCK-6

18. Solve mentally

A) $8+2=$ ___ B) $7-3=$ ___ C) $30+20=$ _____ D) $80-35=$ _____

19. Answer the questions.

A) Aisha had 3 apples and 6 bananas. How much number of fruits does she have?

B) Rita has 20 pencils. She gave 12 to Jiya. How many pencils are left with her?

BLOCK-7

20. Find the missing numbers

$$\begin{array}{r} \text{A) } \quad 8 \quad 6 \quad 2 \\ + \quad \square \quad 1 \quad \square \\ \hline 11 \quad 7 \quad 6 \end{array}$$

$$\begin{array}{r} \text{B) } \quad \square \quad 2 \quad 1 \\ + \quad \quad 3 \quad \square \\ \hline 7 \quad 5 \quad 7 \end{array}$$

21. A library has 456 English books and 244 Hindi books. How many books are there in all?

SUMMATIVE ASSESSMENT – I

GRADE –3

REVISION WORK SHEET

SUBJECT: EVS

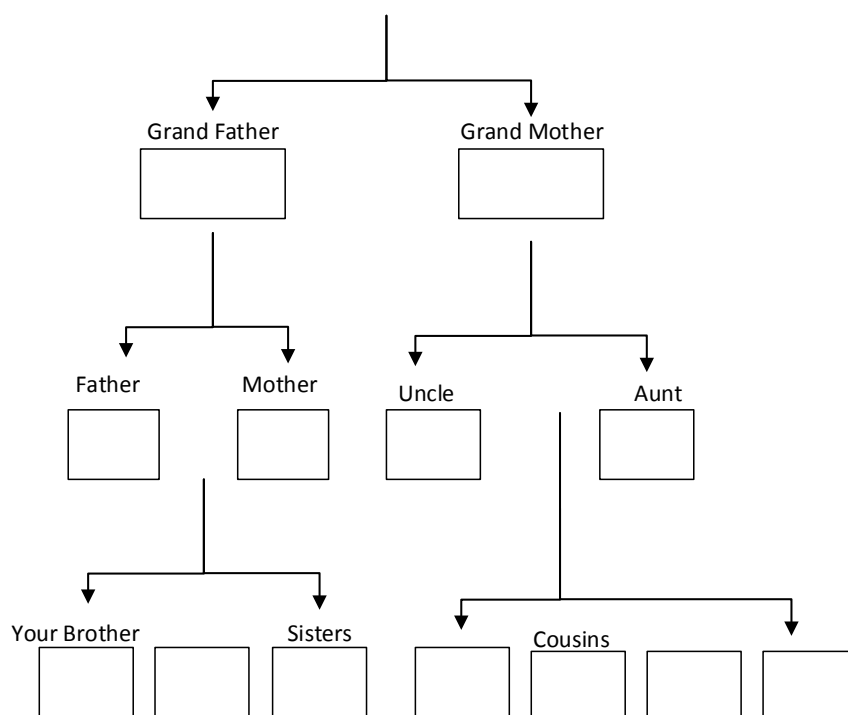
BLOCK – 1

1. What is nuclear family and joint family and what are the other names given for these families.
2. Write few ways how you help your family members at home.
3. If there is someone in your family who cannot hear, speak or see and listen how will you help him/her.

True or False:

- 1) A nuclear family has children, uncle and aunts ()
- 2) All families have same number of people ()
- 3) There are two types of families ()
- 4) Hearing aid is used for people who cannot hear ()
- 5) We can use sign language to talk with people who cannot see ()

II. Your Family Chart. Write your family members name.



C. You belong to which family, nuclear or extended?

BLOCK – 2

1. What is work and leisure? List some activities of work and leisure you do.
2. What are the benefits of sharing work?

BLOCK – 3

1. What are the indoor and outdoor games? Give few examples.
2. Name few games that we can play alone.
3. Write 3 reasons why games are important for us.

BLOCK – 4

1.

People	Places	Work
Doctor, Nurse	Hospital	
Shopkeeper		
Police Officer		
Post Man		
Sweeper		
Barber		
Gardener		
Tailor		
Teacher		
Principal		

BLOCK-5

1. Important places in Neighborhood.

PLACES	HOW IT IS HELPFUL
1. Bank	
2. Hospital	
3. ATM	
4. Post office	
5. Fire station	

2. What numbers should we dial if we want to call an ambulance, a fire station or a police station?

BLOCK – 6

1. What is farming? What do we get from farming?
2. What is animal husbandry and how is it helpful for us? What things do we get from animals?
3. What is mining? Why do people dig mines?
4. What is forestry? What things do we get from forestry?

BLOCK – 7

- 1) What is a man-made shelter? Give some examples.
- 2) What is an animal made shelter? Give some examples.
- 3) What is a natural shelter? Give some examples.

Block – 8

Animals	Type of Movement	Body Parts
1. Horse		
2. Ant		
3. Kangaroo		
4. Squirrel		
5. Koala		
6. Fish		
7. Birds		
8. Rabbit		
9. Deer		
10. Cockroach		
11. Tiger		
12. Cheetah		
13. Langur		
14. Snake		
15. Duck		

1. Write Vernamala ీ to ీ.

2. Write the next letter of given letter.

a) ీ: _____

b) ీ: _____

c) ీ: _____

d) ీ: _____

e) ీ: _____

f) ీ: _____

g) ీ: _____

h) ీ: _____

i) ీ: _____

j) ీ: _____

Telugu Revision Worksheet - II Grade - III

3) Encircle the next letter of the given letter.

a) ఙ - క, ఖ, ఙ

b) ఖ - క, ఙ, చ

c) చ - ఙ, జ, క

d) జ - ఙ, క, డ

e) క - ఙ, ఖ, చ

f) ఙ - జ, చ, జ

g) డ - జ, చ, ఙ

h) ఙ - జ, డ, జ

i) జ - ఙ, ఙ, జ

j) ఙ - అ, ఙ, ఙ

۱۔ مندرجہ ذیل خالی جگہ مکمل کیجئے۔ Fill in the blanks

- ۱۔ ا ت ث
 ۲۔ ج د ڈ
 ۳۔ ذ ر س ش
 ۴۔ ض ط ع ف
 ۵۔ ک م و

۲۔ مندرجہ ذیل حروف کے درمیان میں کون سا حرف آتا ہے۔ Which letter comes in between

- ۱۔ ن ح
 ۲۔ ذ ص
 ۳۔ ع ف
 ۴۔ ک ل
 ۵۔ ن ہ
 ۶۔ ط ع
 ۷۔ چ خ
 ۸۔ م و
 ۹۔ ج ح
 ۱۰۔ ص ط
 ۱۱۔ ب ت
 ۱۲۔ ر ز
 ۱۳۔ ف ک
 ۱۴۔ ج ح
 ۱۵۔ ت ث
 ۱۶۔ گ م

۳۔ مندرجہ ذیل حروف کو الگ کر کے لکھیے۔ Split the letters

۱۔ محنت =

۲۔ میدان =

۳۔ پھول =

۴۔ لڑکا =

۵۔ لوگ =

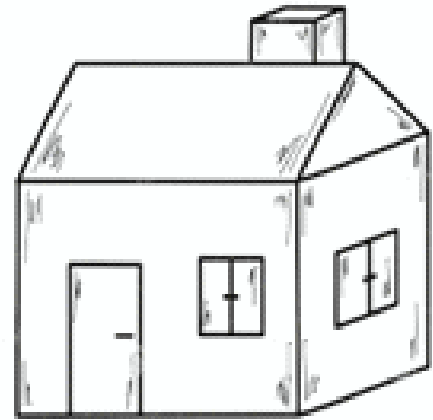

۴۔ دو حرفی الفاظ لکھیے۔ Write two letter words

۵۔ تین حرفی الفاظ لکھیے۔ Write three letter words

۶۔ مندرجہ ذیل الفاظ کا F لکھیے۔ Rewrite the words

۱۔ تتلی ۲۔ لڑکا ۳۔ کھیل ۴۔ پنی ۵۔ سیر

۷۔ مندرجہ ذیل تصاویر میں رسم بھر کر: م لکھیے۔ Colour the pictures and name the



Write the Urdu alphabet

۸۔ الف سے لے کر حروف تہجی لکھیے۔

۹۔ پھولوں کی تصویر تیار کر: م لکھیے Draw the pictures of flowers

